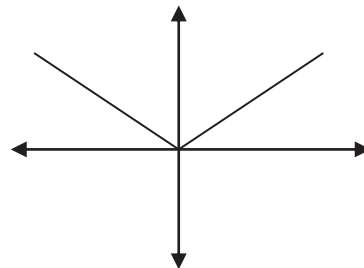


Function Sort Cards

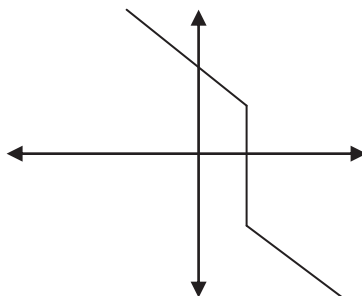
Cut out cards on the dotted lines.

x	y
1	-2
3	4
5	10

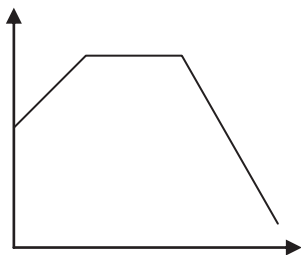
A grocery store is selling peaches for \$0.98 per pound.



x	y
2	-1
2	-3
2	-5



You visit a yard sale with your friends Pete, Sharon, and Brandon. Brandon buys 4 old CDs for \$8.00, and Sharon buys 3 old CDs for \$6.00. Pete talks to the seller and makes a deal to buy 4 CDs for \$7.00.



$$y = 3x + 2$$

x	y
-2	10
0	6
2	10

$$y = x^2$$

x	y
5	1
6	1
7	1

