

A.7

1.

What is the slope of the line that contains (4, -1) and (3, 3)?

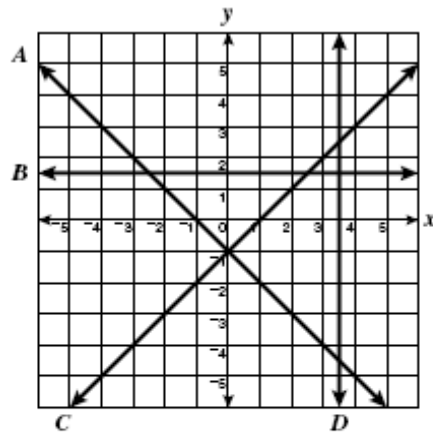
F -4

G $-\frac{1}{2}$

H $-\frac{1}{4}$

J 2

2.



Which line on the graph has an undefined slope?

- A A
- B B
- C C
- D D

3.

What is the slope of the line $3x + y = 5$?

A 3

B -3

C $\frac{1}{3}$

D $-\frac{1}{3}$

4.

What is the slope of the line that contains points (2, 3) and (2, -4)?

A Undefined

B 0

C $-\frac{1}{4}$

D -4

5.

What is the slope of the line represented by the equation $-2y = x - 1$?

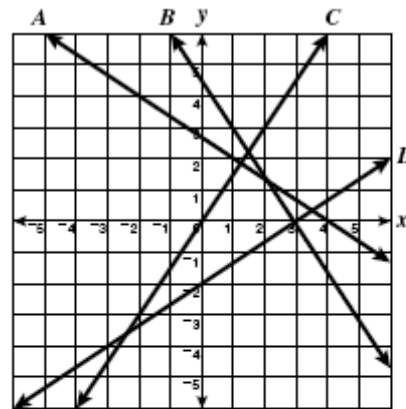
A -2

B $-\frac{1}{2}$

C $\frac{1}{2}$

D 2

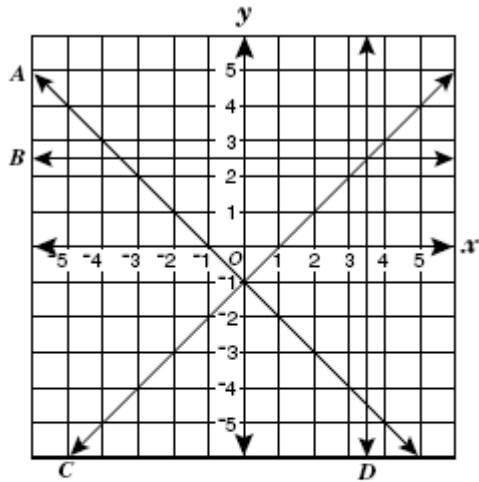
6.



Which line on the grid appears to have slope $\frac{2}{3}$?

- F A
- G B
- H C
- J D

7.



Which line has a negative slope?

- A A
- B B
- C C
- D D

8.

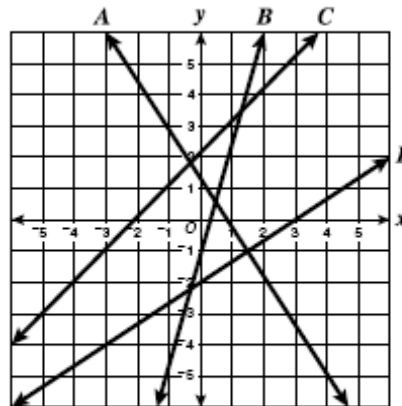
What is the slope of the line that goes through

$(-3, 2)$ and $(3, 2)$?

- F Undefined
- G 0
- H $\frac{2}{3}$
- J $\frac{3}{2}$

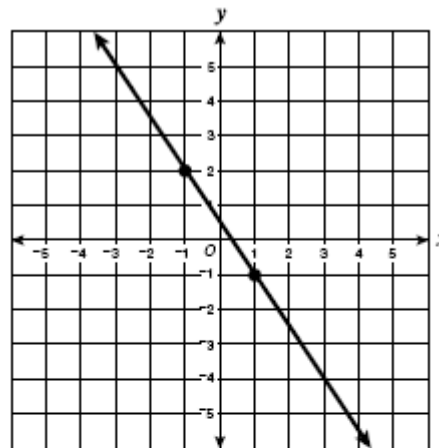
9.

Which line on the graph below has a negative slope?



- A A
- B B
- C C
- D D

10.



The line shown contains $(-1, 2)$ and $(1, -1)$. What is the slope of the line?

- F $\frac{3}{2}$
- G $\frac{2}{3}$
- H $-\frac{2}{3}$
- J $-\frac{3}{2}$