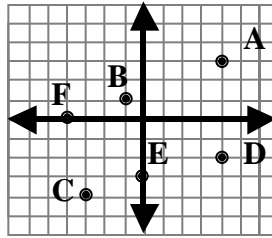


Write the ordered pair for each point.

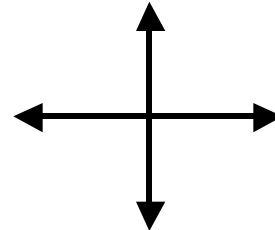
1. A
2. B
3. C
4. D
5. E
6. F



Name the quadrant in which the point is located.

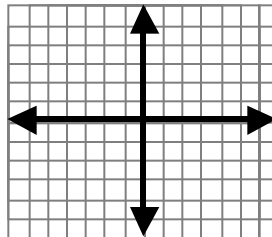
7. (5, 2)
8. (-3, -1)
9. (-2, 3)
10. (6, 0)
11. (0, -2)
12. (4, -3)

Label the quadrants! →




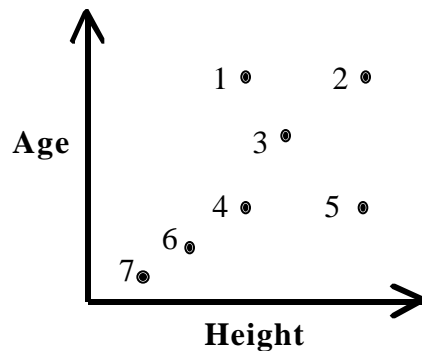
Graph each point on the coordinate plane.

13. A(5, -2)
14. B(3, 5)
15. C(-3, 0)
16. D(-3, 4)
17. E(-3, -3)
18. F(-5, 1)
19. G(2, -1)
20. H(0, 4)



The Bus Stop

Who is represented by each point on the graph below?



Number: Alice Brenda Cathy Dennis Errol Freda Gavin