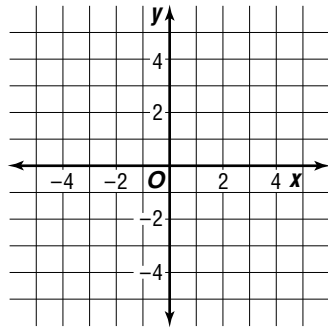


Practice

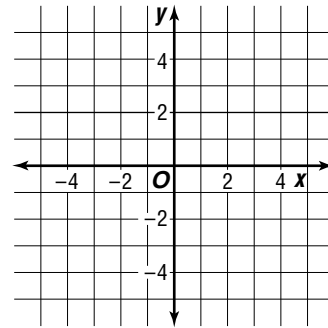
Graphing Systems of Inequalities

Solve each system of inequalities by graphing.

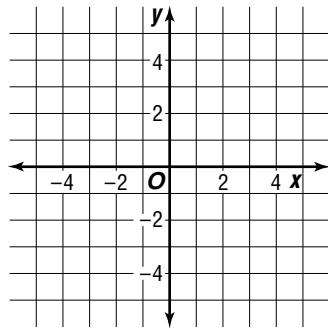
1. $y \geq -x$
 $y \geq x$



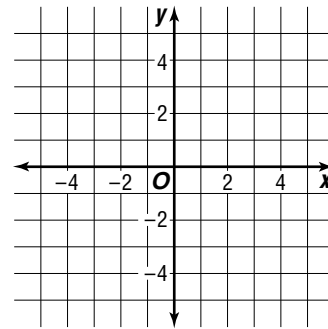
2. $y > x - 2$
 $y \leq 2$



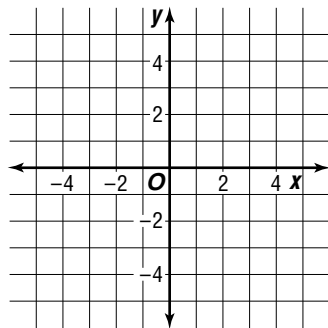
3. $y < x - 1$
 $y \leq 2x + 1$



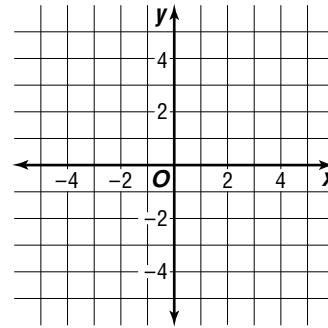
4. $y \leq x + 3$
 $y > 2x$



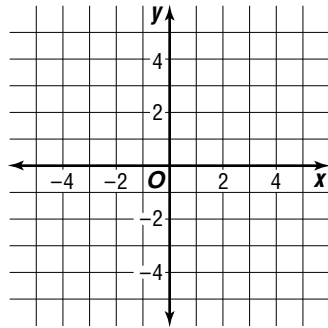
5. $y < 1 - x$
 $y \leq 1 - 3x$



6. $x < 2$
 $y - x \leq 2$



7. $y < x$
 $2x - y \geq 3$



8. $|x + 1| \leq y$

