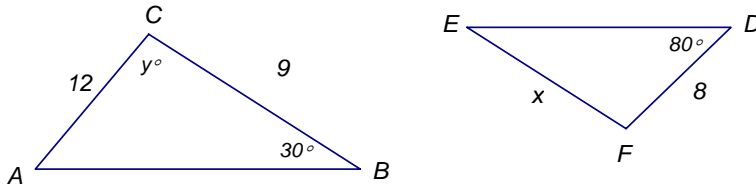


Chapter5: Similarity  
 Lesson 5-3: Similar Triangles  
 Warmup: Current

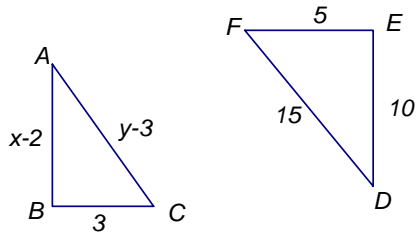
Name \_\_\_\_\_  
 Date \_\_\_\_\_  
 Period \_\_\_\_\_

$\triangle ABC$  is similar to  $\triangle DEF$ . Find the values of  $x$  and  $y$ .

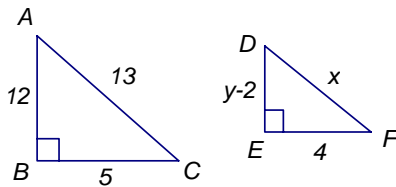
1.



2.

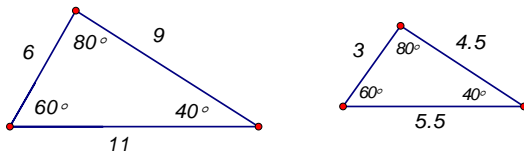


3.



Determine whether the pair of figures is similar. Justify your answer.

4.



5.

