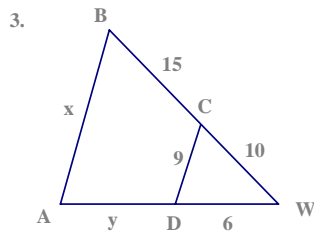
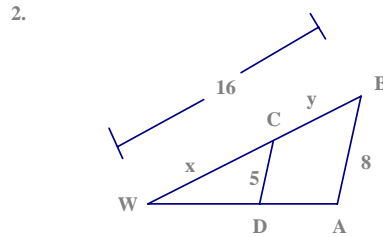
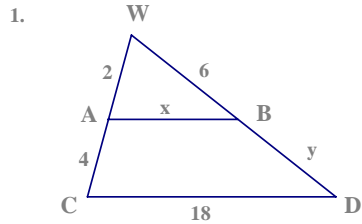


Chapter5: Similarity  
 Lesson 5-4: Proportional parts  
 Warmup: Current

Name \_\_\_\_\_  
 Date \_\_\_\_\_  
 Period \_\_\_\_\_

If  $\overline{AB} \parallel \overline{CD}$ , find the values of x and y.



Find the value of x.

