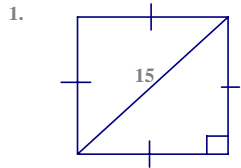


Chapter 9: Surface Area/Volume
 Lesson 9-1: Area of 2-D Shapes
 Warmup: Current

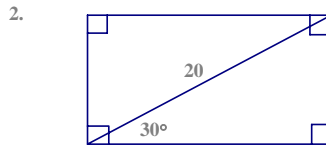
Name _____
 Date _____
 Period _____

Find the area and perimeter of each polygon.



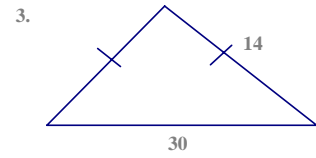
Perimeter = _____

Area = _____



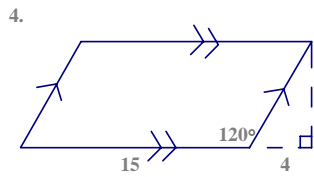
Perimeter = _____

Area = _____



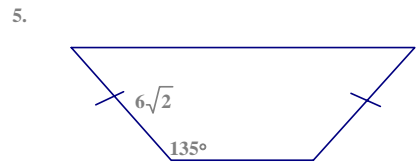
Perimeter = _____

Area = _____



Perimeter = _____

Area = _____



Perimeter = _____

Area = _____