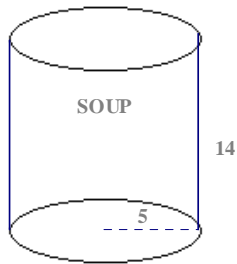
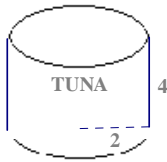


Find the lateral area, surface area and volume for each figure to the nearest tenth.

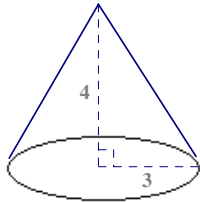
1. A soup can's height 14 cm and radius 5 cm.



2. A can of tuna has a height of 4 inches and a radius of 2 inches.



3. A cone with a radius 3 cm and height 4 cm.



4. A cone with a radius 5 cm and height 12 cm.

