

Finding equations from graphs

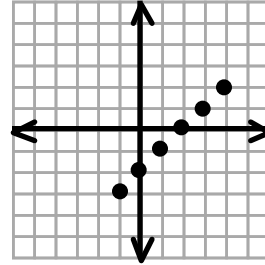
Name _____ Pd _____

For each graph, find the slope, y-intercept, the equation of the line that would be drawn through the points on each graph and three points on the line.

1. Slope: _____ Y-intercept: _____

Equation: _____

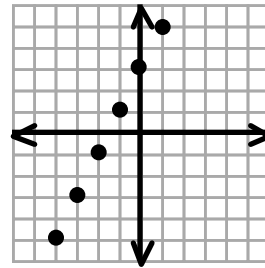
X	Y



2. Slope: _____ Y-intercept: _____

Equation: _____

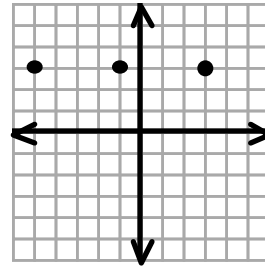
X	Y



3. Slope: _____ Y-intercept: _____

Equation: _____

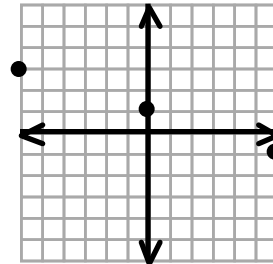
X	Y



4. Slope: _____ Y-intercept: _____

Equation: _____

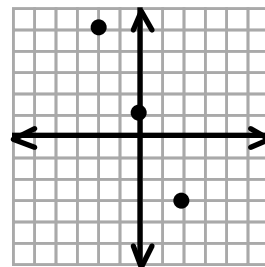
X	Y



5. Slope: _____ Y-intercept: _____

Equation: _____

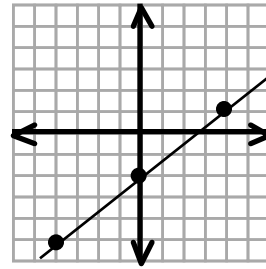
X	Y



6. Slope: _____ Y-intercept: _____

Equation: _____

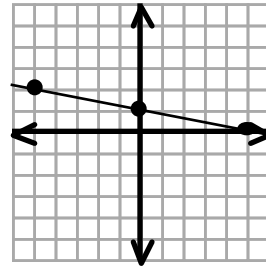
X	Y



7. Slope: _____ Y-intercept: _____

Equation: _____

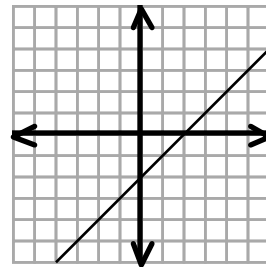
X	Y



8. Slope: _____ Y-intercept: _____

Equation: _____

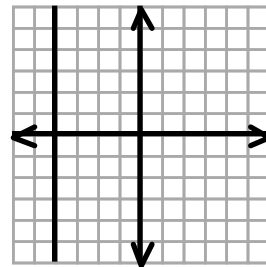
X	Y



9. Slope: _____ Y-intercept: _____

Equation: _____

X	Y



10. Slope: _____ Y-intercept: _____

Equation: _____

X	Y

