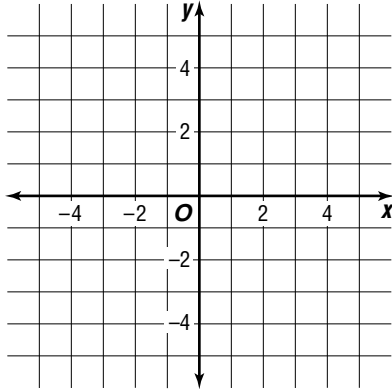


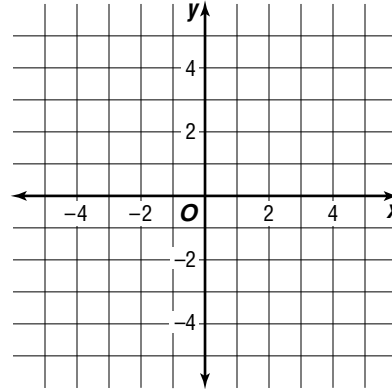
Practice

Graphing Linear Equations**Graph each equation by using the x - and y -intercepts.**

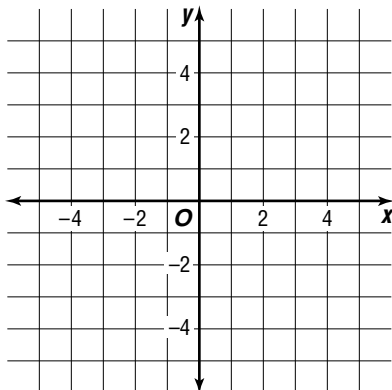
1. $3x - y = 3$



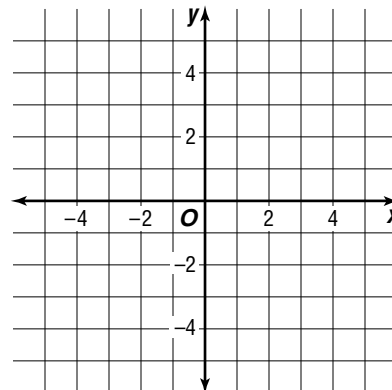
2. $3y - 2x = 6$



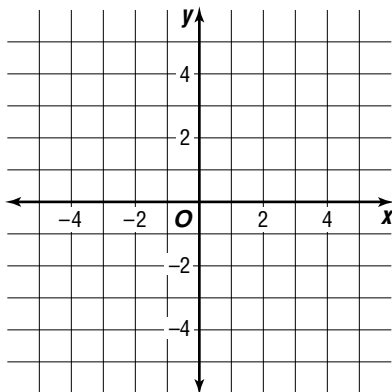
3. $4y + x = -2$



4. $x + y = -3$

**Graph each equation by using the slope and y -intercept.**

5. $y = -\frac{1}{2}x + 3$



6. $3y + 6 = 2x$

